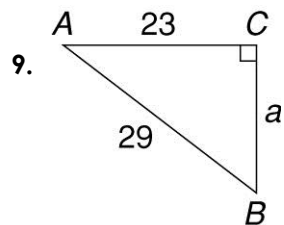
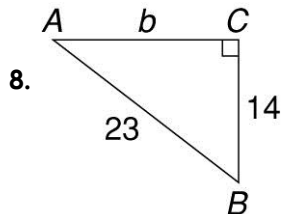
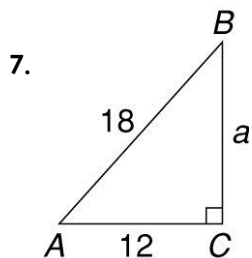
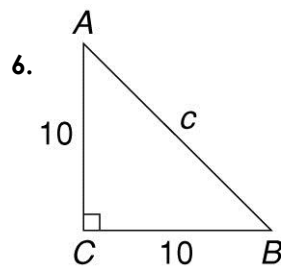
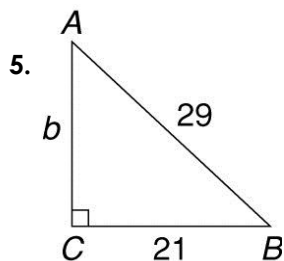
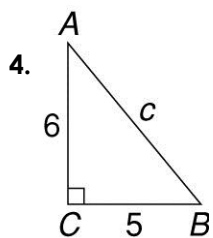
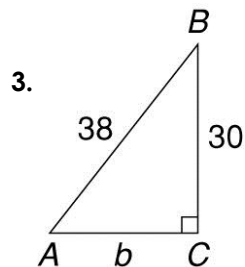
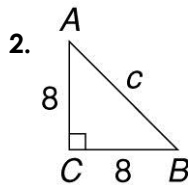
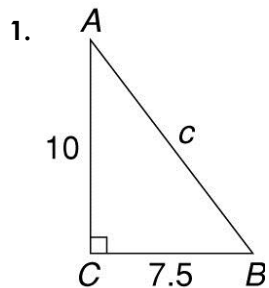
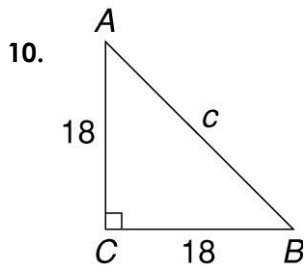


Pythagorean Theorem Worksheet #2

Solve for the unknown side in each right triangle.



Name _____ Class _____



11. $a = 0.5, b = ?, c = 1.3$

12. $a = ?, b = 18, c = 28$

13. $a = 21, b = ?, c = 46$

14. $a = ?, b = 38, c = 45$

15. $a = 40, b = ?, c = 65$