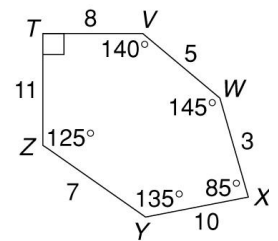
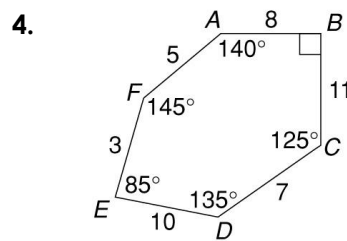
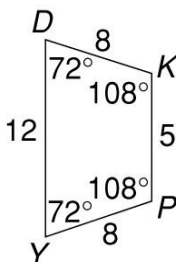
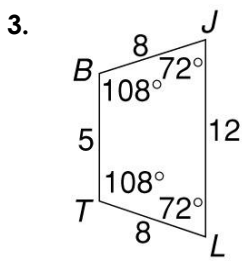
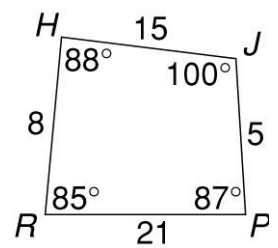
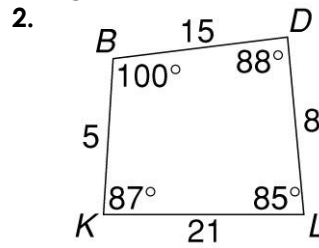
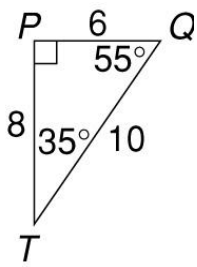
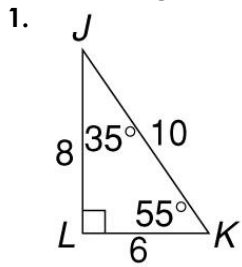
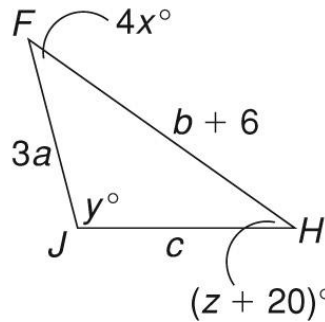
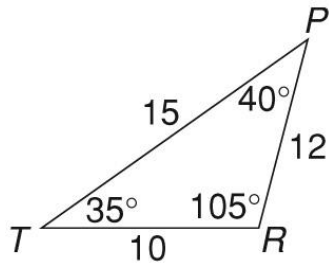


## 7-6: Congruence Worksheet

Write a congruence statement for each pair of congruent polygons.



In the figure, triangle  $PRT \cong$  triangle  $FJH$ .



5. Find  $a$ .

6. Find  $b$ .

7. Find  $c$ .

8. Find  $x$ .

9. Find  $y$ .

10. Find  $z$ .