
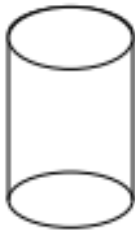
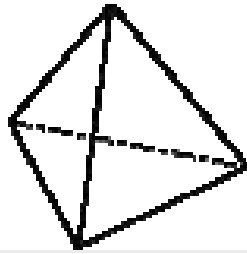
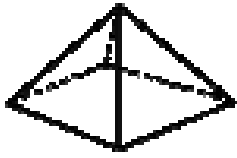
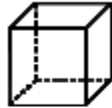


# 3-D Figures Worksheet

Classify each 3-D figure. Then tell the number of faces, edges, and vertices.



Describe these shapes:



This is a \_\_\_\_\_

It has \_\_\_\_\_



\_\_\_\_\_

\_\_\_\_\_